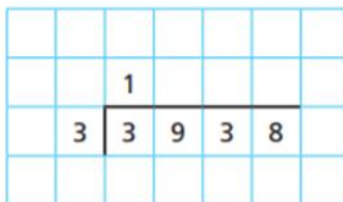
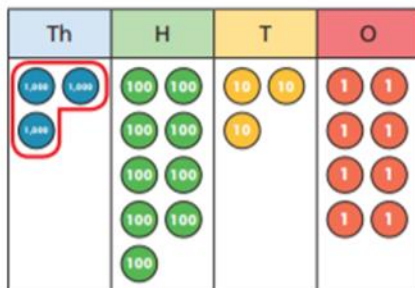


- 1 a) Circle the groups of 3 to help complete the sentences and calculation.

The first step has been done for you.



There is group of 3 thousands.

There are groups of 3 hundreds.

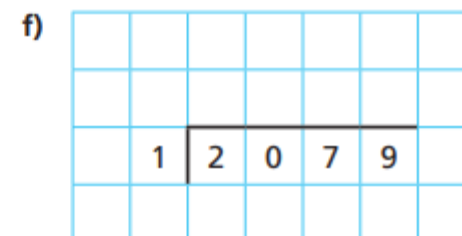
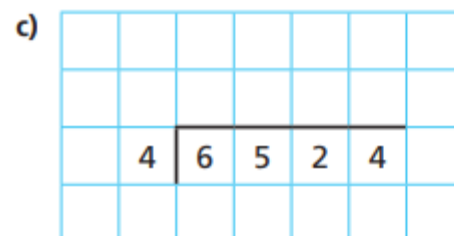
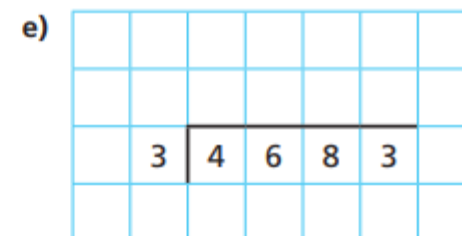
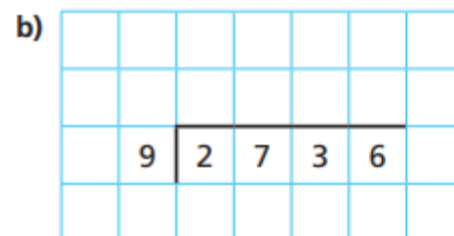
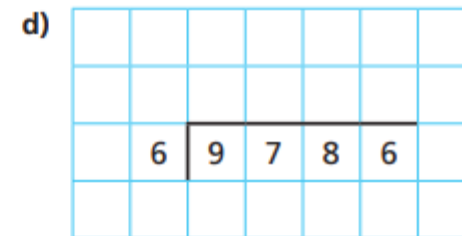
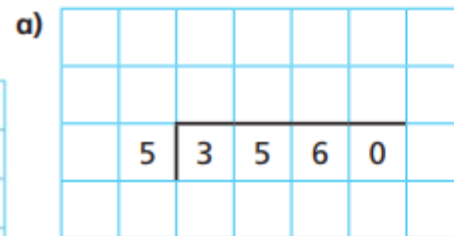
There is group of 3 tens.

There are groups of 3 ones.

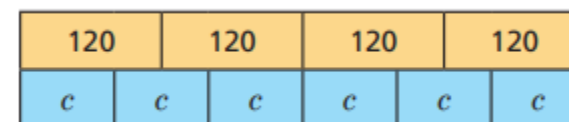
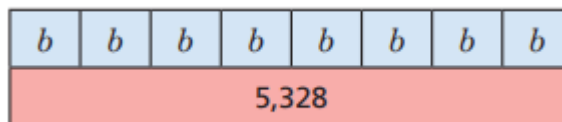
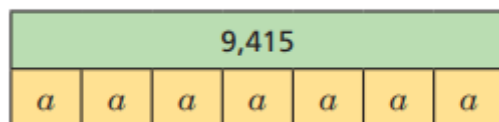
There are ones left over.

$3,938 \div 3 =$ remainder

- 2 Complete the divisions.



- 3 Work out the values of a , b and c .



Extension

Find the missing digits.

a)

		2	2		1	
		8	9	6		

b)

		3		6		
		6	5		4	


Books are available to buy in three different deals.

Deal A



£12.99

Deal B



£38.16

Deal C



£25.60

Which is the best deal?
