





How would you separate the mixture of items below? Draw a diagram to show how you would do it. If you have the materials in your house maybe you could try.



You have been asked to help the manager of a supermarket separate some mixed up materials. Draw a diagram showing how you separate each mixture. Complete the sentences to show which process you have used. Choose from these processes:

Filtration	Magnetic Attraction	Evaporation	Sieving
			
Sand and Water. To separate these materials I will use _____	Diagram: 	Paper Clips and Rice. To separate these materials I will use _____	Diagram:
Raisins and Flour. To separate these materials I will use _____	Diagram: 	Salt and Water. To separate these materials I will use _____	Diagram: