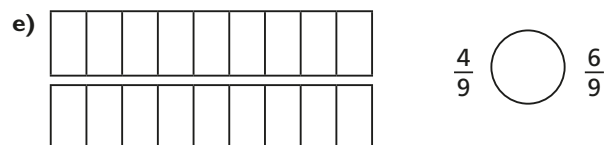
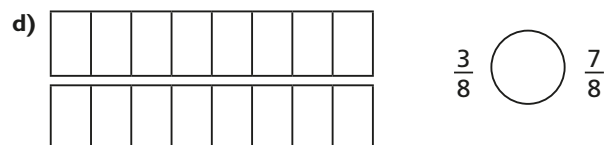
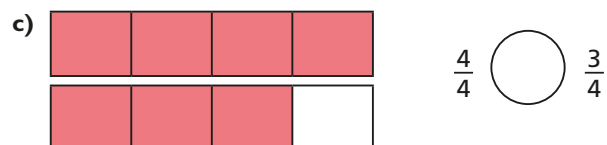
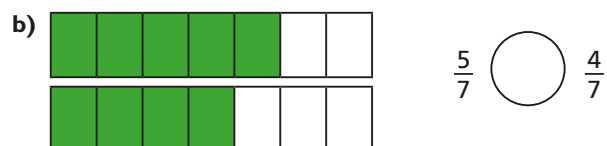


- 1 Write $<$, $>$ or $=$ to compare the fractions.

Use the bar models to help you.



- f) What do you notice about your answers?

- g) Complete the sentence.

When the denominators are the same, the _____

the numerator, the _____ the fraction.

- 2 a) Represent each fraction on a bar model.

$$\frac{14}{20} \quad \frac{9}{10} \quad \frac{4}{5} \quad \frac{3}{4}$$

- b) Use the bar models to sort these fractions in order from greatest to smallest.

$$\frac{14}{20} \quad \frac{9}{10} \quad \frac{4}{5} \quad \frac{3}{4}$$

- c) Order the fractions from smallest to greatest.

$$\frac{7}{10} \quad \frac{1}{2} \quad \frac{2}{5} \quad \frac{3}{10}$$

- 3 Amir is comparing the fractions $\frac{4}{15}$ and $\frac{3}{10}$

$$\frac{4}{15} = \frac{8}{30} \quad \frac{3}{10} = \frac{9}{30}$$

$$\frac{9}{30} \text{ is greater than } \frac{8}{30}$$

$$\frac{3}{10} \text{ is greater than } \frac{4}{15}$$

Explain Amir's method.

- 2 a) Represent each fraction on a bar model.

$$\frac{14}{20} \quad \frac{9}{10} \quad \frac{4}{5} \quad \frac{3}{4}$$

- b) Use the bar models to sort these fractions in order from greatest to smallest.

$$\frac{14}{20} \quad \frac{9}{10} \quad \frac{4}{5} \quad \frac{3}{4}$$

- c) Order the fractions from smallest to greatest.

$$\frac{7}{10} \quad \frac{1}{2} \quad \frac{2}{5} \quad \frac{3}{10}$$

- 3 Amir is comparing the fractions $\frac{4}{15}$ and $\frac{3}{10}$

$$\frac{4}{15} = \frac{8}{30} \quad \frac{3}{10} = \frac{9}{30}$$

$$\frac{9}{30} \text{ is greater than } \frac{8}{30}$$

$$\frac{3}{10} \text{ is greater than } \frac{4}{15}$$

Explain Amir's method.

- 4 Ron and Rosie are practising penalties.

Ron scored 7 out of 10.

Rosie scored 23 out of 30

I scored more than you, so I should take penalties for the school team.

I did not miss as many as you, so I should take the penalties.

Compare fractions to explain who should take penalties for the school team.

- 5 Write $<$, $>$ or $=$ to compare the fractions.

a) $\frac{3}{4} \bigcirc \frac{5}{6}$

d) $\frac{3}{5} \bigcirc \frac{5}{7}$

b) $\frac{2}{3} \bigcirc \frac{5}{9}$

e) $\frac{9}{10} \bigcirc \frac{3}{4}$

c) $\frac{2}{3} \bigcirc \frac{7}{8}$

f) $\frac{9}{10} \bigcirc \frac{19}{20}$

- 6 Annie, Tommy and Kim are making flags for the school fair.

Annie has completed $3\frac{3}{4}$ flags, Tommy has completed $3\frac{2}{3}$ flags and Kim has completed $\frac{18}{5}$ flags.

Who has completed the most flags?